

CANDIDATE
NAME

CENTRE
NUMBER

--	--	--	--	--

CANDIDATE
NUMBER

--	--	--	--



ADDITIONAL MATHEMATICS

0606/13

Paper 1

May/June 2015

2 hours

Candidates answer on the Question Paper.

Additional Materials: Electronic calculator

READ THESE INSTRUCTIONS FIRST

Write your Centre number, candidate number and name on all the work you hand in.

Write in dark blue or black pen.

You may use an HB pencil for any diagrams or graphs.

Do not use staples, paper clips, glue or correction fluid.

DO NOT WRITE IN ANY BARCODES.

Answer **all** the questions.

Give non-exact numerical answers correct to 3 significant figures, or 1 decimal place in the case of angles in degrees, unless a different level of accuracy is specified in the question.

The use of an electronic calculator is expected, where appropriate.

You are reminded of the need for clear presentation in your answers.

At the end of the examination, fasten all your work securely together.

The number of marks is given in brackets [] at the end of each question or part question.

The total number of marks for this paper is 80.

This document consists of **15** printed pages and **1** blank page.

Mathematical Formulae**1. ALGEBRA***Quadratic Equation*

For the equation $ax^2 + bx + c = 0$,

$$x = \frac{-b \pm \sqrt{b^2 - 4ac}}{2a}$$

Binomial Theorem

$$(a + b)^n = a^n + \binom{n}{1} a^{n-1} b + \binom{n}{2} a^{n-2} b^2 + \dots + \binom{n}{r} a^{n-r} b^r + \dots + b^n,$$

where n is a positive integer and $\binom{n}{r} = \frac{n!}{(n-r)!r!}$

2. TRIGONOMETRY*Identities*

$$\sin^2 A + \cos^2 A = 1$$

$$\sec^2 A = 1 + \tan^2 A$$

$$\operatorname{cosec}^2 A = 1 + \cot^2 A$$

Formulae for $\triangle ABC$

$$\frac{a}{\sin A} = \frac{b}{\sin B} = \frac{c}{\sin C}$$

$$a^2 = b^2 + c^2 - 2bc \cos A$$

$$\Delta = \frac{1}{2} bc \sin A$$


1 (i) State the period of $\sin 2x$. [1]

(ii) State the amplitude of $1 + 2 \cos 3x$. [1]

(iii) On the axes below, sketch the graph of

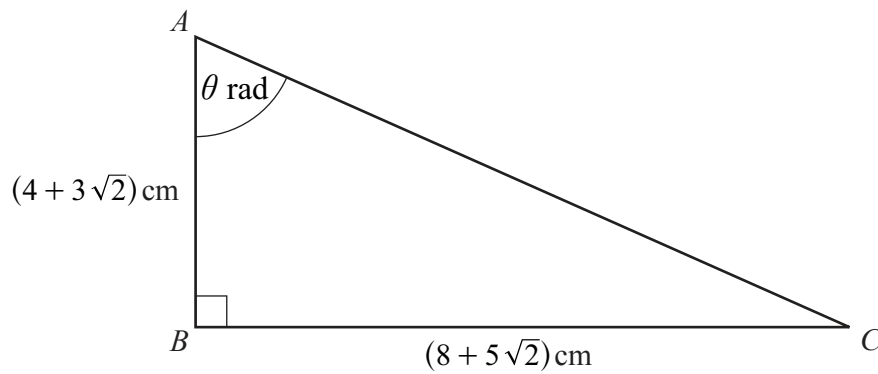
(a) $y = \sin 2x$ for $0^\circ \leq x \leq 180^\circ$, [1]

(b) $y = 1 + 2 \cos 3x$ for $0^\circ \leq x \leq 180^\circ$. [2]



(iv) State the number of solutions of $\sin 2x - 2 \cos 3x = 1$ for $0^\circ \leq x \leq 180^\circ$. [1]

2 Do not use a calculator in this question.



The diagram shows the triangle ABC where angle B is a right angle, $AB = (4 + 3\sqrt{2})$ cm, $BC = (8 + 5\sqrt{2})$ cm and angle $BAC = \theta$ radians. Showing all your working, find

(i) $\tan \theta$ in the form $a + b\sqrt{2}$, where a and b are integers, [2]

(ii) $\sec^2 \theta$ in the form $c + d\sqrt{2}$, where c and d are integers. [3]

3 (i) Find the first 4 terms in the expansion of $(2 + x^2)^6$ in ascending powers of x . [3]

(ii) Find the term independent of x in the expansion of $(2 + x^2)^6 \left(1 - \frac{3}{x^2}\right)^2$. [3]

- 4 (a) Given that the matrix $\mathbf{X} = \begin{pmatrix} 2 & -4 \\ k & 0 \end{pmatrix}$, find \mathbf{X}^2 in terms of the constant k . [2]

- (b) Given that the matrix $\mathbf{A} = \begin{pmatrix} a & 1 \\ b & 5 \end{pmatrix}$ and the matrix $\mathbf{A}^{-1} = \begin{pmatrix} \frac{5}{6} & -\frac{1}{6} \\ -\frac{2}{3} & \frac{1}{3} \end{pmatrix}$, find the value of each of the integers a and b . [3]

- 5 The curve $y = xy + x^2 - 4$ intersects the line $y = 3x - 1$ at the points A and B . Find the equation of the perpendicular bisector of the line AB . [8]

6 The polynomial $f(x) = ax^3 - 15x^2 + bx - 2$ has a factor of $2x - 1$ and a remainder of 5 when divided by $x - 1$.

(i) Show that $b = 8$ and find the value of a . [4]

(ii) Using the values of a and b from part (i), express $f(x)$ in the form $(2x - 1)g(x)$, where $g(x)$ is a quadratic factor to be found. [2]

(iii) Show that the equation $f(x) = 0$ has only one real root. [2]

7 The point A , where $x = 0$, lies on the curve $y = \frac{\ln(4x^2 + 3)}{x - 1}$. The normal to the curve at A meets the x -axis at the point B .

(i) Find the equation of this normal. [7]

(ii) Find the area of the triangle AOB , where O is the origin. [2]

- 8 It is given that $f(x) = 3e^{2x}$ for $x \geq 0$,
 $g(x) = (x + 2)^2 + 5$ for $x \geq 0$.

(i) Write down the range of f and of g . [2]

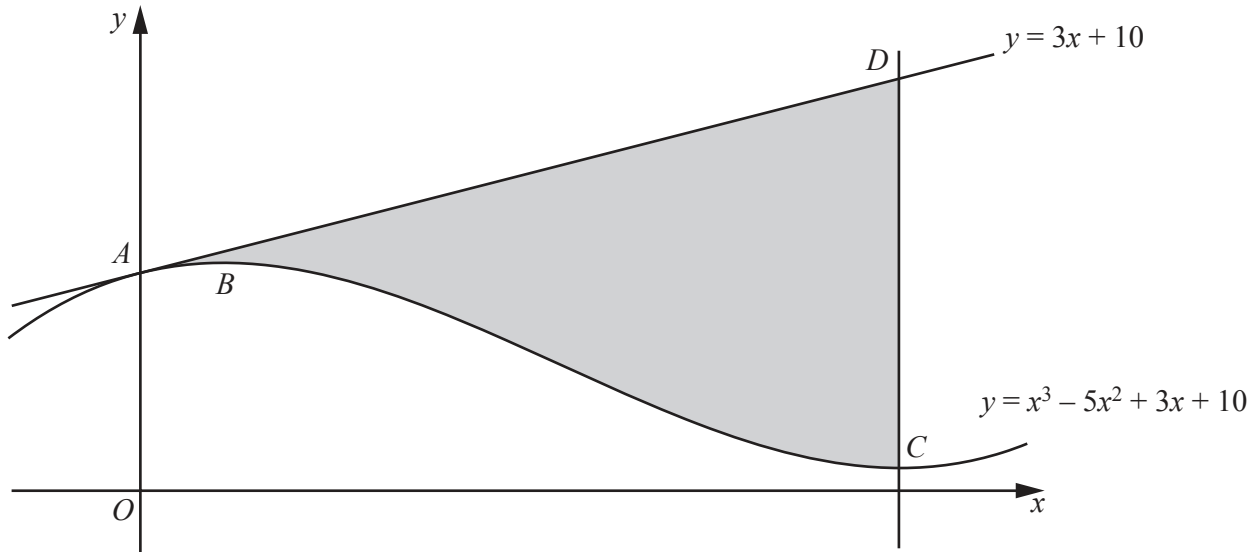
(ii) Find g^{-1} , stating its domain. [3]

(iii) Find the exact solution of $gf(x) = 41$. [4]

(iv) Evaluate $f'(\ln 4)$.

[2]

9



The diagram shows parts of the line $y = 3x + 10$ and the curve $y = x^3 - 5x^2 + 3x + 10$. The line and the curve both pass through the point A on the y -axis. The curve has a maximum at the point B and a minimum at the point C . The line through C , parallel to the y -axis, intersects the line $y = 3x + 10$ at the point D .

(i) Show that the line AD is a tangent to the curve at A . [2]

(ii) Find the x -coordinate of B and of C . [3]

(iii) Find the area of the shaded region $ABCD$, showing all your working.

[5]

10 (a) Solve $4 \sin x = \operatorname{cosec} x$ for $0^\circ \leq x \leq 360^\circ$. [3]

(b) Solve $\tan^2 3y - 2 \sec 3y - 2 = 0$ for $0^\circ \leq y \leq 180^\circ$. [6]

(c) Solve $\tan\left(z - \frac{\pi}{3}\right) = \sqrt{3}$ for $0 \leq z \leq 2\pi$ radians.

[3]

BLANK PAGE

Permission to reproduce items where third-party owned material protected by copyright is included has been sought and cleared where possible. Every reasonable effort has been made by the publisher (UCLES) to trace copyright holders, but if any items requiring clearance have unwittingly been included, the publisher will be pleased to make amends at the earliest possible opportunity.

To avoid the issue of disclosure of answer-related information to candidates, all copyright acknowledgements are reproduced online in the Cambridge International Examinations Copyright Acknowledgements Booklet. This is produced for each series of examinations and is freely available to download at www.cie.org.uk after the live examination series.

Cambridge International Examinations is part of the Cambridge Assessment Group. Cambridge Assessment is the brand name of University of Cambridge Local Examinations Syndicate (UCLES), which is itself a department of the University of Cambridge.